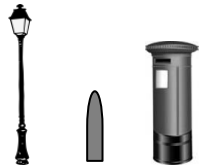
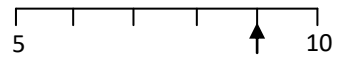


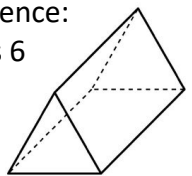
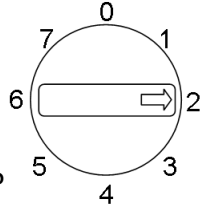


Name: _____

Date: _____

Class/Group: _____

A: Place Value, Add and Subtract		B: Multiply, Divide and Fractions		C: Measure and Geometry	
1. What is the missing number? 4 14 24 34 44 <input type="text"/>	2:1 54	11. $6 \times 5 =$	2:11 30	21. Which of these is the tallest ? a. a lamppost b. a bollard c. a post-box	2:18 a
2. Circle the 4s that have a value of 40 . 104 48 43 54	2:2 48, 43	12. Which are the odd numbers? 9 18 27 36	2:11 9, 27		
3. What number is labelled? 	2:3 9	13. What symbol is missing? 5×9 <input type="text"/> 45	2:12 =	22. How many minutes are there in 1 hour ? a. 12 b. 24 c. 60	2:21 c
4. Put these in order, smallest first. 38 3 83 8	2:4 3, 8, 38, 83	14. What symbol is missing? 28 <input type="text"/> $4 = 7$	2:12 ÷		
5. Write this number in words. 62	2:5 Sixty two	15. Is this true? Write 'yes' or 'no'. $9 \div 3 = 3 \div 9$	2:13 No	23. Which of these shapes has 4 sides ? a. triangle b. circle c. rectangle	2:23 c
6. A garden has 12 trees. 4 are cut down. How many trees now?	2:6 8	16. 7 flowers each have 3 petals. How many petals are there in total?	2:14 21		
7. Use $11 + 9 = 20$ to answer: $44 +$ <input type="text"/> $= 80$	2:7 36	17. I have 18 eggs. If they come in boxes of 6, how many boxes do I have?	2:14 3	24. Complete the sentence: A triangular prism has 6 a. vertices b. edges c. faces	2:24 a
8. $3 + 9 + 6 =$	2:8 18	18. What fraction of the strawberries is circled? 	2:15 $\frac{2}{3}$		
9. Tick (✓) if true: $12 + 9 = 9 + 12$ <input checked="" type="checkbox"/> $35 - 7 = 7 - 35$ <input type="checkbox"/>	2:9 ✓ x	19. Write the fraction three quarters in numerals.	2:15 $\frac{3}{4}$	25. This dial is pointing at 2. What number will it point to after being turned clockwise through 3 right angles ? 	2:28 0
10. Use $29 - 12 = 17$ to help find: $12 + 17 =$ <input type="text"/>	2:10 29	20. What is $\frac{1}{4}$ of 16 ?	2:16 4		
Total (A)		Total (B)		Total (C)	
Test Total (A+B+C)		R (0-9)	Y (10-19)	G (20-25)	