
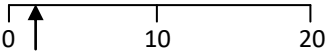

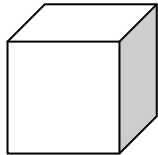
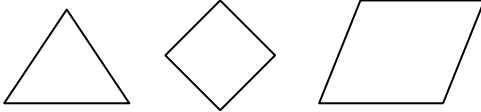


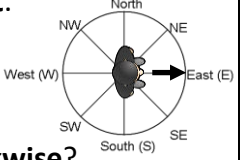


Name: \_\_\_\_\_

Date: \_\_\_\_\_

Class/Group: \_\_\_\_\_

A: Place Value, Add and Subtract		B: Multiply, Divide and Fractions		C: Measure and Geometry	
1. What is the missing number? 0 5 10 15 <input type="text"/> 25	2:1	11. $4 \times 10 =$	2:11	21. What <b>units</b> would you use to measure the <b>capacity</b> of a cup? a. centimetres b. grams c. millilitres	2:17
2. What is the <b>value</b> of the <b>8</b> in this number? 18	2:2	12. $8 \div 2 =$	2:11		
3. <b>Estimate</b> the number labelled. 	2:3	13. What symbol is missing? $12 \div 6$ <input type="text"/> 2	2:12	22. How many <b>vertices</b> does a <b>cuboid</b> have? a. 6 b. 8 c. 12	2:24
4. Use <, > or = to make this correct: 52 <input type="text"/> 24	2:4	14. What symbol is missing? 6 <input type="text"/> 5 = 30	2:12		
5. Write this number in numerals. thirty eight	2:5	15. Tick (✓) if true: $7 \div 8 = 8 \div 7$ <input type="checkbox"/> $25 \times 5 = 5 \times 25$ <input type="checkbox"/>	2:13	23. Name the shaded face on this <b>cube</b> . 	2:25
6. There are 18 sweets in a bag. Tom eats 7 of them. How many are left?	2:6	16. £21 is shared between 3 people. How much does each person get?	2:14		
7. $11 +$ <input type="text"/> $= 20$	2:7	17. 3 cars each have 4 people in them. How many people are in the cars?	2:14	24. Tick (✓) the shape that contains a <b>right angle</b> . 	2:26
8. $53 - 37 =$	2:8	18. What fraction of the strawberries are circled? 	2:15		
9. Is this true? Write 'yes' or 'no'. $45 - 27 = 27 - 45$	2:9	19. Shade in $\frac{1}{3}$ of the shape. 	2:15	25. Ben is facing <b>East</b> . What direction will he be facing after turning through <b>1 right-angle anticlockwise</b> ? 	2:28
10. Use $17 + 25 = 42$ to help find: $42 - 17 =$ <input type="text"/>	2:10	20. What is $\frac{3}{4}$ of 20?	2:16		
Total (A)		Total (B)		Total (C)	
Test Total (A+B+C)		R (0-9)	Y (10-19)	G (20-25)	