
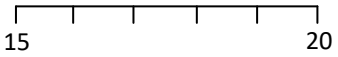
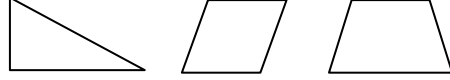




Name: _____

Date: _____

Class/Group: _____

A: Place Value, Add and Subtract		B: Multiply, Divide and Fractions		C: Measure and Geometry										
1. What is the missing number? 0 3 6 9 <input type="text"/> 15	2:1	11. $2 \times 9 =$	2:11	21. Write <, > or = to make the statement correct.	2:18									
2. Circle the 8s that have a value of 80 . 82 28 68 81	2:2	12. Which are the even numbers? 7 14 21 28	2:11	 1000 millilitres <input type="checkbox"/> 1 litre										
3. Draw an arrow to label 16. 	2:3	13. What symbol is missing? $22 \square 11 = 2$	2:12	22. Tick (✓) the shape that has a vertical line of symmetry .	2:23									
4. Put these in order, smallest first. 1 12 2 21	2:4	14. What symbol is missing? $4 \times 4 \square 16$	2:12											
5. Write this number in words. 98	2:5	15. Is this true? Write 'yes' or 'no'. $7 \times 4 = 4 \times 7$	2:13	23. Draw the next shape in this pattern:	2:27									
6. There are 23 people on a bus. 9 get off. How many people now?	2:6	16. Bread rolls are sold in packs of 8. If I buy 3 packs, how many rolls do I get?	2:14											
7. Use $12 + 8 = 20$ to answer: <input type="text"/> + 40 = 100	2:7	17. 9 apples are shared. How many people are there if each person gets 1?	2:14	24. A group of people were asked what their favourite drink was. Complete the tally chart:	2:29									
8. $37 + 15 =$	2:8	18. What fraction is shaded? 	2:15	<table border="1" data-bbox="1478 1125 1971 1284"> <thead> <tr> <th>Colour</th> <th>Tally</th> <th>Total</th> </tr> </thead> <tbody> <tr> <td>Cola</td> <td> </td> <td></td> </tr> <tr> <td>Lemonade</td> <td></td> <td>12</td> </tr> </tbody> </table>	Colour	Tally	Total	Cola			Lemonade		12	
Colour	Tally	Total												
Cola														
Lemonade		12												
9. Tick (✓) if true: $8 - 13 = 13 - 8$ <input type="checkbox"/> $27 + 9 = 9 + 27$ <input type="checkbox"/>	2:9	19. How many thirds are in 2 whole ones?	2:15											
10. Use $84 - 26 = 58$ to help find: $26 + 58 =$ <input type="text"/>	2:10	20. How many quarters do you need to make one half ?	2:16	25. How many people were asked their favourite drink in total ?	2:30									
Total (A)		Total (B)		Total (C)										
Test Total (A+B+C)		R (0-9)	Y (10-19)	G (20-25)										